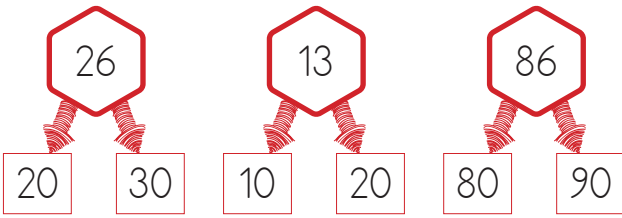
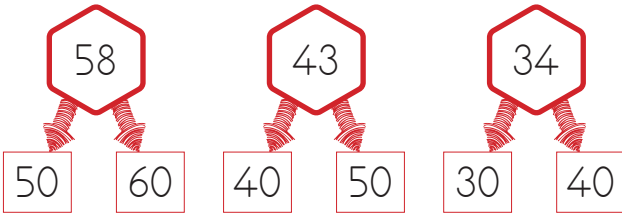
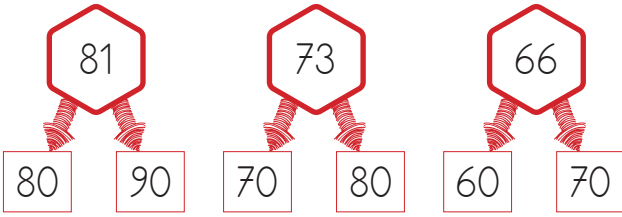
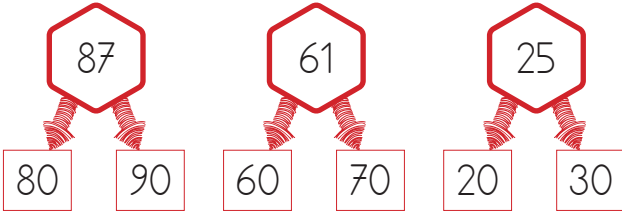
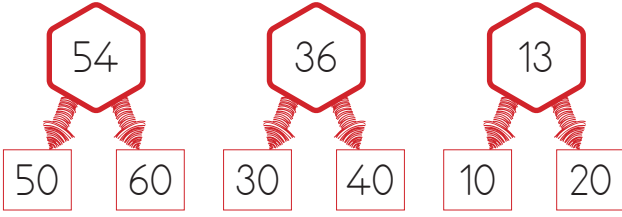
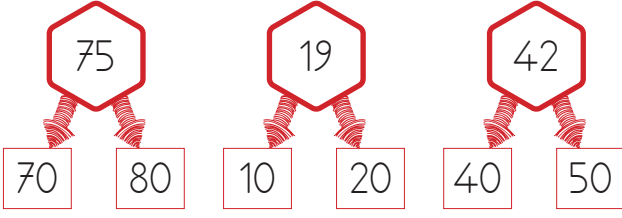


1. Aşağıda verilen sayıların en yakın oldukları onluklarını bulup örnekteki gibi boyyalım.



2. Aşağıda verilen sayıların en yakın oldukları sayıları örnekteki gibi yazalım.

73 → .....	22 → .....
25 → .....	16 → .....
68 → .....	55 → .....
54 → .....	72 → .....
13 → .....	93 → .....
91 → .....	27 → .....
22 → .....	51 → .....
87 → .....	18 → .....
34 → .....	29 → .....
71 → .....	35 → .....
45 → .....	59 → .....
66 → .....	63 → .....
53 → .....	11 → .....
78 → .....	42 → .....
24 → .....	75 → .....