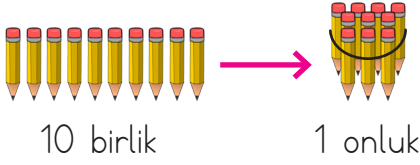
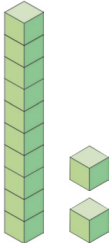




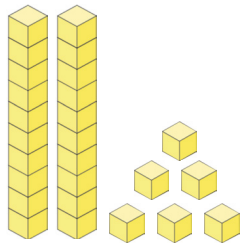
10 tane birlik 1 onluk eder.



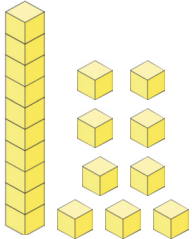
1. Aşağıda sayı blokları ile gösterilen sayıları örnekteki gibi yazınız.



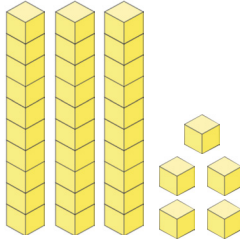
1. onluk + 2. birlik  
..12..



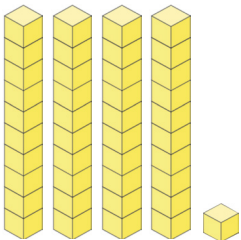
... onluk + ... birlik  
.....



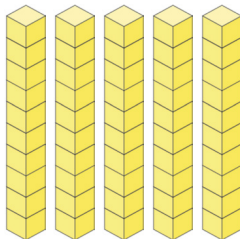
... onluk + ... birlik  
.....



... onluk + ... birlik  
.....



... onluk + ... birlik  
.....



... onluk + ... birlik  
.....

2. Aşağıda sayıları onluk ve birliklerine örnekteki gibi ayıralım.

63 ..... onluk + ..... birlik

58 ..... onluk + ..... birlik

96 ..... onluk + ..... birlik

72 ..... onluk + ..... birlik

33 ..... onluk + ..... birlik

20 ..... onluk + ..... birlik

13 ..... onluk + ..... birlik

28 ..... onluk + ..... birlik

69 ..... onluk + ..... birlik

82 ..... onluk + ..... birlik

14 ..... onluk + ..... birlik

78 ..... onluk + ..... birlik

50 ..... onluk + ..... birlik