


Kesirler

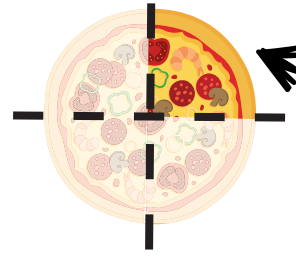
Nesnenin
tamamına
bütün deriz.




Nesneyi
2 eş parçaya bölersek, her
parçaya yarım deriz.



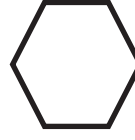

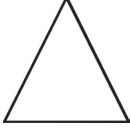
Nesneyi
4 eş parçaya bölersek, her
parçaya çeyrek deriz.



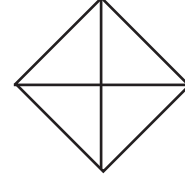
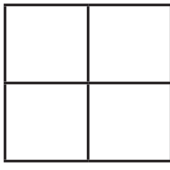
Aşağıdaki şekillerin bütünü boyayınız.



Aşağıdaki şekillerin yarımını boyayınız.



Aşağıdaki şekillerin çeyreğini boyayınız.



Aşağıdaki şekillerin altına "bütün", "yarım", veya "çeyrek" yazınız.

















