


1. Aşağıdaki görsellerin temsil ettiği sayıları kullanarak istenilen işlemleri örnekteki gibi yapalım.

 38

 19


 68

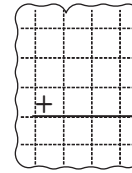
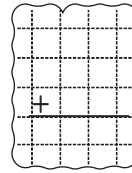
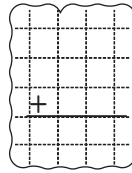
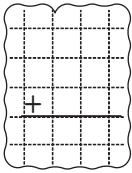

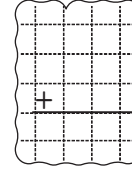
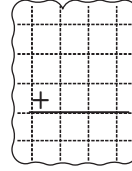
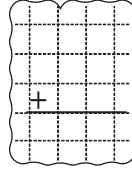
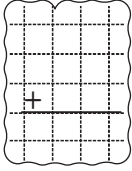
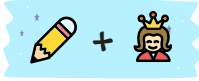
 17

 56

 73

 25

 47



2. Aşağıdaki toplama işlemlerini yapalım. Bulduğunuz sonuçların yazıldığı balonlarla, işlemlerin altındaki yıldızları aynı renge boyayalım.

$$\begin{array}{r} 19 \\ + 43 \\ \hline \end{array}$$



$$\begin{array}{r} 16 \\ + 35 \\ \hline \end{array}$$



$$\begin{array}{r} 36 \\ + 28 \\ \hline \end{array}$$



$$\begin{array}{r} 27 \\ + 55 \\ \hline \end{array}$$



$$\begin{array}{r} 39 \\ + 14 \\ \hline \end{array}$$



$$\begin{array}{r} 38 \\ + 32 \\ \hline \end{array}$$



$$\begin{array}{r} 46 \\ + 25 \\ \hline \end{array}$$



$$\begin{array}{r} 34 \\ + 29 \\ \hline \end{array}$$

