

SAATLERİ TANIYALIM

TAM SAATLER



Saatlerdeki **uzun** kola **yelkovan** denir.

Saatlerdeki **kısa** kola **akrep** denir.

Tam saatlerde akrep sayının üzerinde, yelkovan ise 12'nin üzerinde olmalıdır.

YARIM SAATLER



Yarım saatlerde **yelkovan** **6'yı** gösterir.

Yarım saatlerde **akrep** iki sayının **tam ortasını** gösterir.

Yarım saatler **buçuk** diye okunur.

DOĞRU MU YANLIŞ MI?

👉 Aşağıdaki ifadeler doğru ise "D", yanlış ise "Y" harfini boyayınız.

D Y Saatlerdeki kısa kola yelkovan denir.

D Y Saatlerdeki uzun kola akrep denir.

D Y Tam saatlerde akrep hep 12'yi gösterir.

D Y Yarım saatlerde yelkovan 6'yı gösterir.

D Y Tam saatlerde akrep sayının üzerindedir.

D Y Yarım saatler buçuk diye okunur.

D Y Yarım saatlerde akrep iki sayının ortasındadır.

D Y Yarım saatlerde yelkovan 12'yi gösterir.

SAATLERİ YAZALIM


👉 Aşağıdaki saatlerin kaç gösterdiğini yazınız.




Saat:04.00.....



Saat:



Saat:



Saat:



Saat:

Saat:dört.....

Saat:

Saat:

Saat:

Saat:




Saat:



Saat:



Saat:



Saat:



Saat:

Saat:

Saat:

Saat:

Saat:

Saat:

SAATLERİ YAZALIM

👉 Aşağıdaki saatlerin kaç gösterdiğini yazınız.




Saat:



Saat:



Saat:



Saat:



Saat:

Saat:

Saat:


Saat:

Saat:

Saat:



Saat:



Saat:



Saat:



Saat:



Saat:

Saat:

Saat:


Saat:

Saat:


Saat:

SAATLERİ ÇİZELİM


👉 Aşağıdaki saatlerin akrep ve yelkovanlarını örnekteki gibi çizin.




Saat: 09.00




Saat: 06.00



Saat: 01.00



Saat: 02.00



Saat: 12.00


Saat: Dokuz

Saat: Altı


Saat: Bir

Saat: İki


Saat: On iki




Saat: 05.00




Saat: 03.00



Saat: 10.00



Saat: 07.00



Saat: 09.00

Saat: Beş

Saat: Üç


Saat: On

Saat: Yedi


Saat: Dokuz

SAATLERİ ÇİZELİM


👉 Aşağıdaki saatlerin akrep ve yelkovanlarını örnekteki gibi çizin.




Saat: 05.30




Saat: 09.30



Saat: 11.30



Saat: 02.30



Saat: 04.30


Saat: Beş buçuk

Saat: Dokuz buçuk


Saat: On bir buçuk

Saat: İki buçuk


Saat: Dört buçuk




Saat: 12.30




Saat: 03.30



Saat: 06.30



Saat: 01.30



Saat: 08.30

Saat: On iki buçuk

Saat: Üç buçuk

Saat: Altı buçuk

Saat: Bir buçuk

Saat: Sekiz buçuk

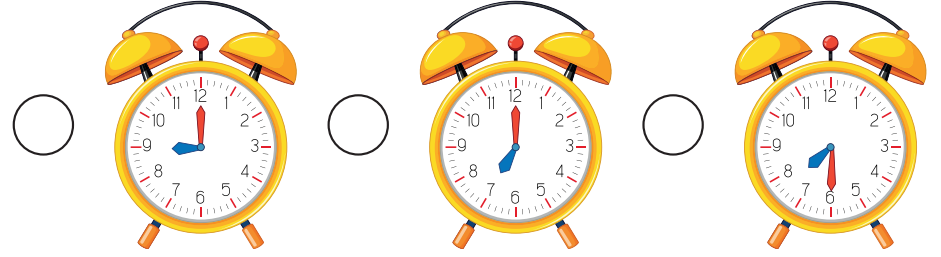
👉 Aşağıdaki metni okuyup soruları yanıtlayınız.

ELVİN'İN BİR GÜNÜ


Merhaba benim adım Elvin, 7 yaşındayım. Ben her sabah saat 07.00'da uyanırım. Elimiyüzümü yıkayıp kahvaltımı yaptıktan sonra saat 08.00'da evden çıkarım. 09.00'da dersimiz başlar. Saat 10:30'da beslenmemi yaparım.




✓ Elvin'in uyandığı saati işaretleyiniz.



✓ Elvin'in dersinin başladığı saati işaretleyiniz.



✓ Elvin'in beslenmesini yaptığı saati işaretleyiniz.

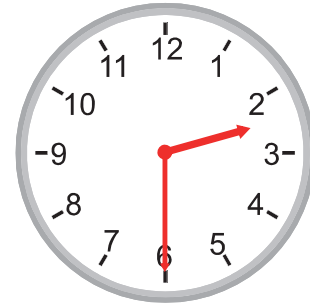
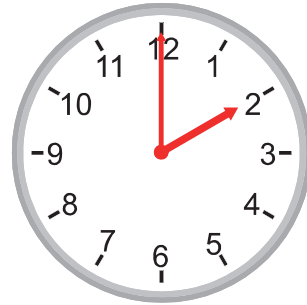
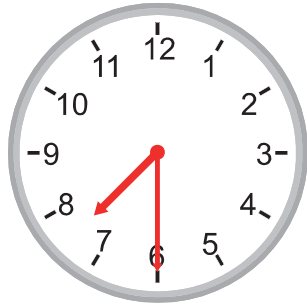
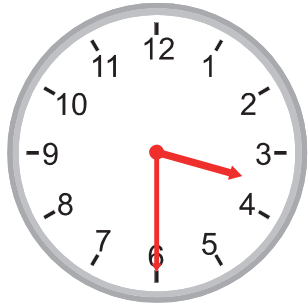
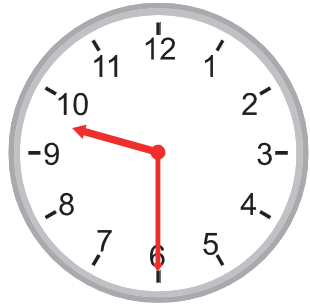
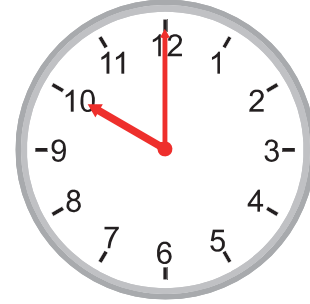

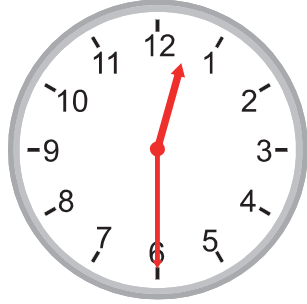
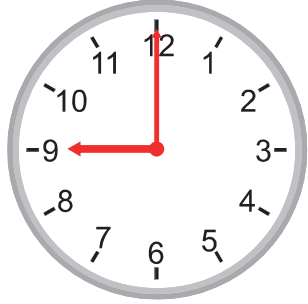
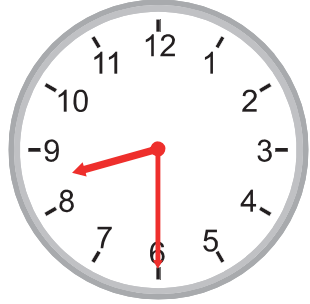


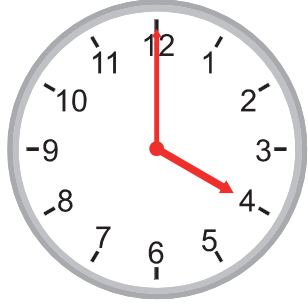
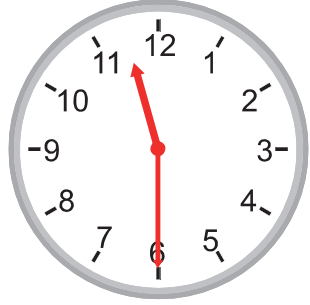


✓ Elvin'in evden çıktığı zamanı yandaki saatin üzerine çiziniz



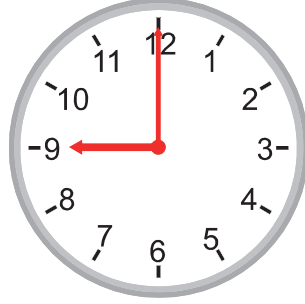
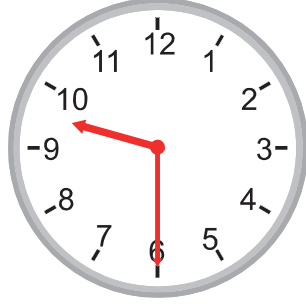
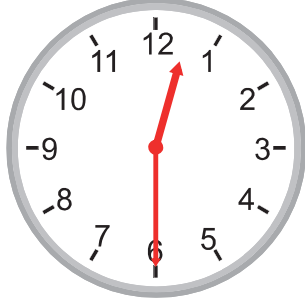
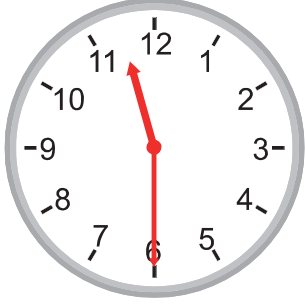
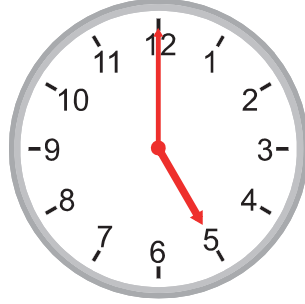
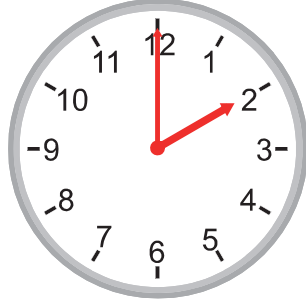
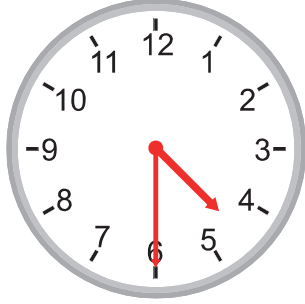
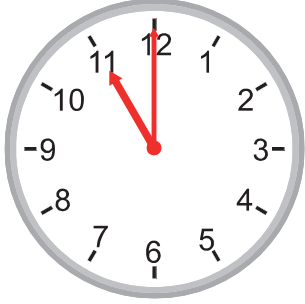
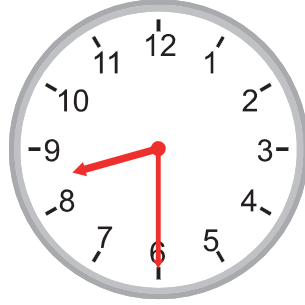
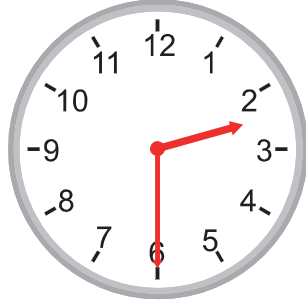

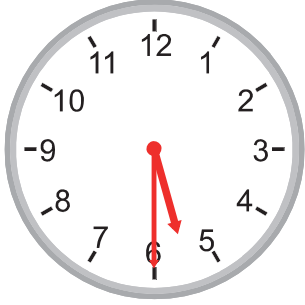
ALİŞTIRMALAR -1-

👉 Aşağıdaki saatlerin kaçı gösterdiğini yazınız.



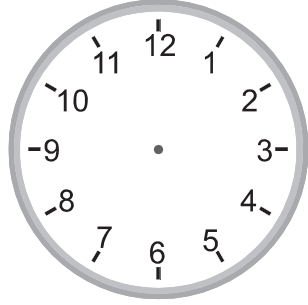
ALİŞTIRMALAR -2-

👉 Aşağıdaki saatlerin kaçı gösterdiğini yazınız.

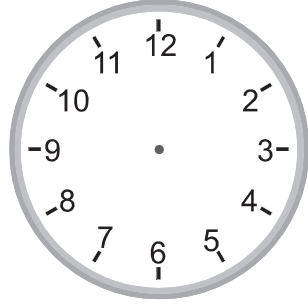


ALİŖTIRMALAR -3-


☞ AŖağıdaki saatlerin akrep ve yelkovanlarını çiziniz.




8:00




10:30



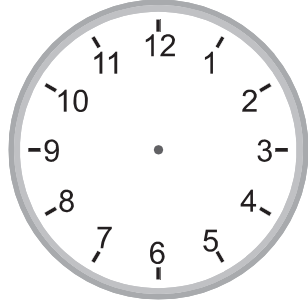
9:00



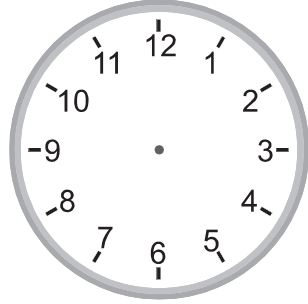
3:30




1:30




4:30




12:30



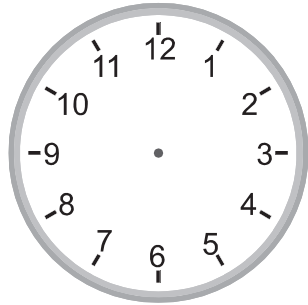
6:30



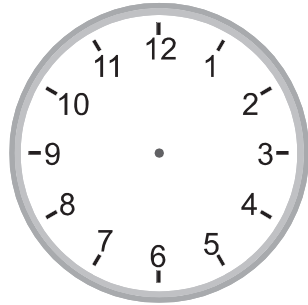
8:30



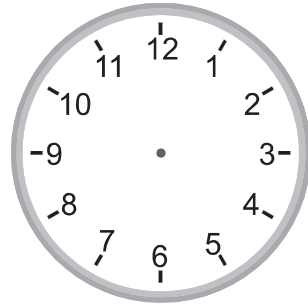
12:00




9:30




2:00



2:30



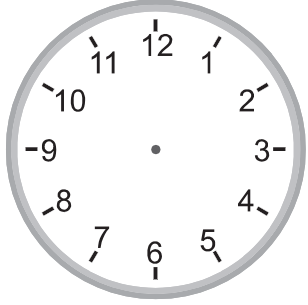
6:00



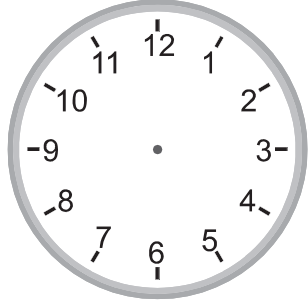
5:00

ALİŖTİRMALAR -4-

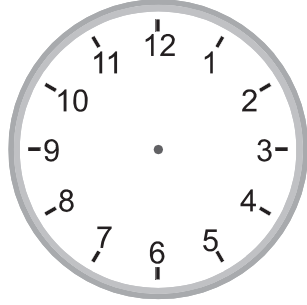
➡ AŖağıdaki saatlerin akrep ve yelkovanlarını çiziniz.




2:30




1:00



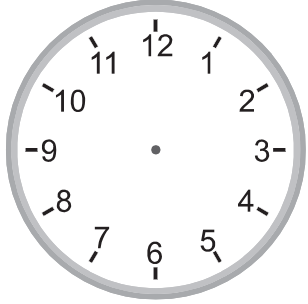
4:00



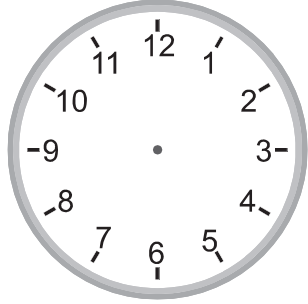
12:00



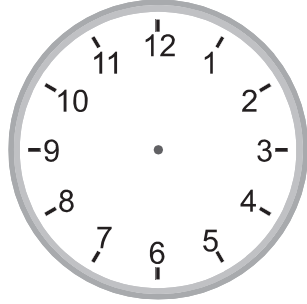
2:00




11:30




6:00



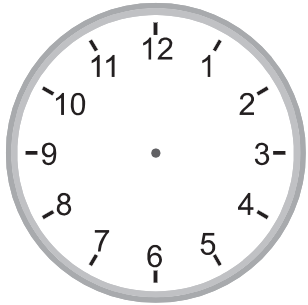
10:30



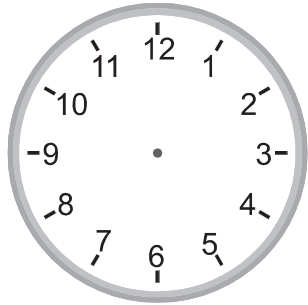
8:30



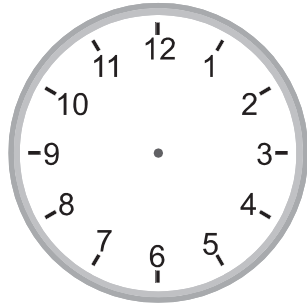
5:00




9:00




7:00



6:30



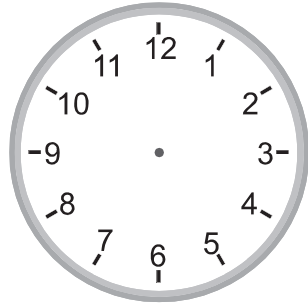

12:30




7:30

SAATLERİ YAZALIM / ÇİZELİM

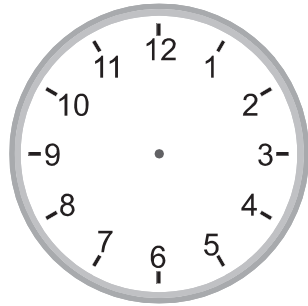


☞ Aşağıda bazı saatlerin okunuşu, bazı saatlerin ise akrep ve yelkovanları verilmiştir. Buna göre aşağıdaki alıştırmaları yapınız.





11:30



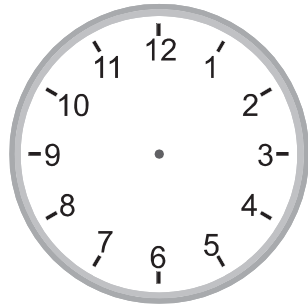
4:00






9:30



3:30



7:00



8:00

SAATLERİ YAZALIM / ÇİZELİM -2-

👉 Aşağıda bazı saatlerin okunuşu, bazı saatlerin ise akrep ve yelkovanları verilmiştir. Buna göre aşağıdaki alıştırmaları yapınız.

