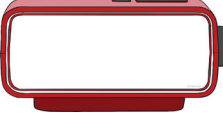


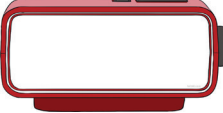


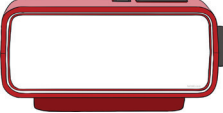


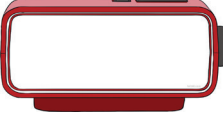


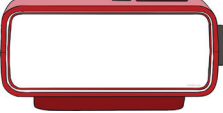


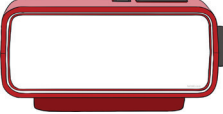


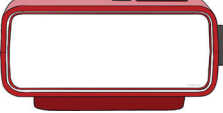


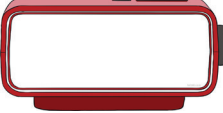






ÖYLE BİR GEÇER ZAMAN KI

● Aşağıda okunuşu verilen zamanları önce dijital saatin üzerine yazınız. Sonrasında analog saatin üzerine çiziniz. Bu zamanın istenilen kadar öncesini veya sonrasını ikinci saatin üzerine çiziniz.

Saat dokuz a on var	→		→		15 dk. sonra	
Saat sekizi beş geçiyor	→		→		Yarım saat önce	
Saat yirmi bir otuz beş	→		→		20 dk. sonra	
Saat on ikiyi yirmi geçiyor	→		→		Yarım saat sonra	
Saat onu yirmi beş geçiyor	→		→		5 dk. sonra	
Saat on altı on	→		→		15 dk. önce	
Saat bir buçuk	→		→		Yarım saat önce	
Saat yediye beş var	→		→		20 dk. önce	
Saat on dört	→		→		1 saat sonra	