


# SAYILARI SIRALAMA


● Aşağıda sayıları kamyonların üzerine örnekteki gibi büyükten küçüğe doğru sıralayarak yazınız.

26 75 38 91




91 > 75 > 38 > 26

45 8 12 53




..... > ..... > ..... > .....

86 57 63 65




..... > ..... > ..... > .....

39 35 10 36



..... > ..... > ..... > .....


56 47 87 32



..... > ..... > ..... > .....


● Aşağıda sayıları minibüslerin üzerine örnekteki gibi küçükten büyüğe doğru sıralayarak yazınız.

25 12 9 31




9 < 12 < 25 < 31

82 28 75 56




..... < ..... < ..... < .....

55 48 95 68




..... < ..... < ..... < .....

85 72 91 99



..... < ..... < ..... < .....

5 3 15 41



..... < ..... < ..... < .....